

O. P. JINDAL SCHOOL, SAVITRI NAGAR
Annual Examination - (2022 – 2023)

Class / Section: I()

MM: 40

Subject: Environmental Studies

Time: 2Hr.15Min.

Name: _____

Roll No.: _____

Invigilator Sign: _____ Marks Obtained: _____

Examiner Sign: _____

Fifteen Minutes Extra will be given for reading the Question Paper.

General Instructions: All questions are compulsory.

Q1. Tick (✓) the correct option:**(5 Marks)**

i) We wear cotton clothes on a

a) Sunny Day

b) Windy Day

c) Snowy Day

ii) This is a wild animal

a) Cow

b) Horse

c) Elephant

iii) They have a weak stem

a) Climber

b) Tree

c) Shrub

iv) We see the Moon and the Stars

a) in the morning

b) at night

c) in the afternoon

v) The tip of the mountain is called a

a) Desert

b) Valley

c) Peak

Q2. Fill in the blanks:**(5 Marks)**

Sea	loo	seed	Sun	Wild
-----	-----	------	-----	------

i) A very big water body _____.

ii) The _____ gives us heat and light.

iii) The _____ has a baby plant inside it.

iv) _____ animals live in forests.

v) Hot winds are called _____.

Q3. Write True or False:

(5 Marks)

- i) Snow falls in winters in hilly areas _____.
- ii) Insects are big animals _____.
- iii) Herbs have a thick woody stem _____.
- iv) Moon shines during the day _____.
- v) Deserts get very little rainfall _____.

Q4. Match the following:

(5 Marks)

- | | |
|---------------|------------------|
| i) Earth | a) Windy day |
| ii) Rainbow | b) Wild animal |
| iii) Lion | c) Orange shape |
| iv) Grapevine | d) Seven colours |
| v) Leaves | e) Climber |

Q5. Unjumble the letters to make new words:

(3 Marks)

- i) TCA- _____.
- ii) REET- _____.
- iii) TARS- _____.

Q6. Give one word answer:

(2 Marks)

- i) Land covered with sand- _____.
- ii) Cycles of weather changes- _____.

Q7. Answer the following questions:

(6 Marks)

i) What is a globe?

Ans. _____

ii) What is the shape of the Moon?

Ans. _____


iii) How do birds fly?

Ans. _____


Q8. Draw these shapes of the Moon:

(2 Marks)

i) Full Moon

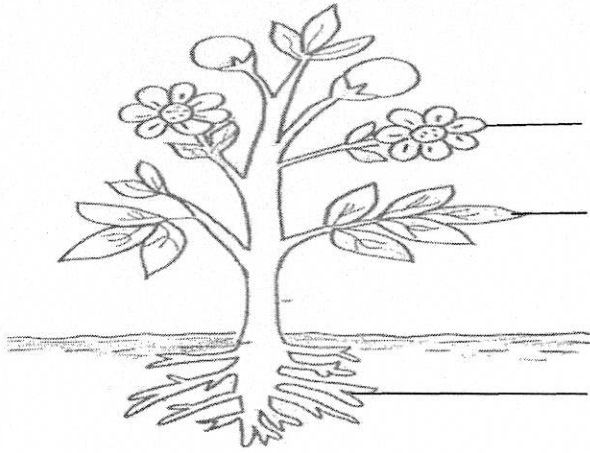


ii) Gibbous Moon



Q9. Colour and label the parts of the plant:

(3 Marks)




Three empty rectangular boxes stacked vertically, intended for labeling the parts of the plant.

Q10. Draw and colour:

(2 Marks)

The Night Sky



Q11. Draw and colour any one thing used on a Sunny Day:

(2 Marks)

